

Name: _____

Counting Nickels (5 Cents)

Add the coins.

1.  = _____


2.  = _____

3.  = _____

4.  = _____

5.  = _____

6.  = _____

7.  = _____

8.  = _____

9.  = _____


10.  = _____

11.  = _____

12.  = _____

13.  = _____

14.  = _____

15.  = _____


16.  = _____

17.  = _____


Name: _____

Counting Dimes (10 Cents)


Add the coins.

1. 

= _____

2. 

= _____

3. 

= _____

4. 

= _____

5. 

= _____

6. 

= _____

7. 

= _____

8. 

= _____



— — —

= _____



— — — — — — — —

= _____



— — — — —

= _____



— — — —

= _____



— — — — — —

= _____



— — — — — — — — —

= _____



— — — — — — —

= _____



— — — — — — — — — —

= _____




— — — —


= _____

Name: _____

Counting Quarters (25 Cents)

Add the coins.


1.  _____ = _____


2.  _____ = _____


3.  _____ = _____

4.  _____ = _____

5.  _____ = _____

6.  _____ = _____


7.  _____ = _____

8. 

= _____

9. 

= _____

10. 


= _____

11. 

= _____

12. 

= _____

13. 

= _____

14. 

= _____

15. 

= _____